



1. Luis eats lunch after 10 o'clock and before 2 o'clock every day. Which clocks show the time Luis might each lunch? Choose all that apply.










2. Which clock shows the same time as the clock face?



(A)



(B)




(C)



(D)



3. Write the time that is shown on the clock face.



4. Emma swims for a half hour. How many minutes is this?

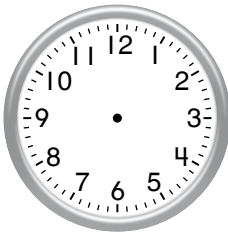
- (A) 15 (B) 30 (C) 60 (D) 90

5. Write the numbers to complete the sentence.

When it is time to leave school, the hour hand is between ____ and ____.

A Trip to the Zoo	
Time	Activity
9:30	Leave School
10:00	Zoo Tour
11:30	Lunch
12:30	Movie
2:00	Leave Zoo

6. Draw hands on the clock face to show the time that the movie starts.



7. Do both clocks show the same time? How do you know you are correct?

